



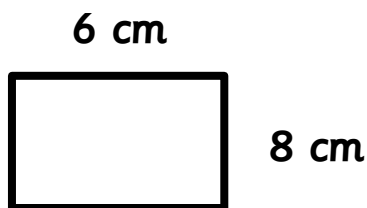
# Perfect Perimeters

## Activity Sheet

Name: \_\_\_\_\_ Class: \_\_\_\_\_

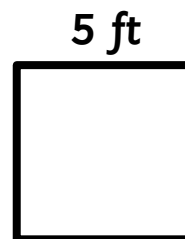
Find the perimeter of each shape.

1



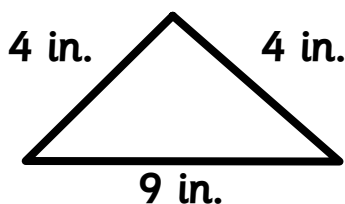
perimeter = \_\_\_\_\_

2



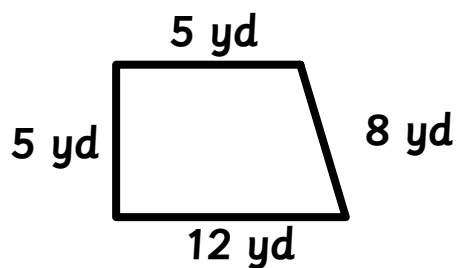
perimeter = \_\_\_\_\_

3



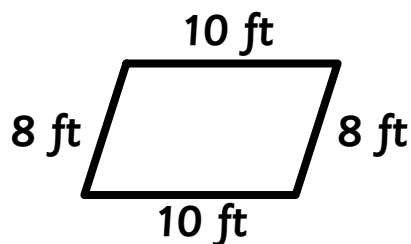
perimeter = \_\_\_\_\_

4



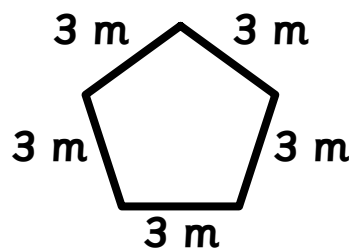
perimeter = \_\_\_\_\_

5




perimeter = \_\_\_\_\_

6

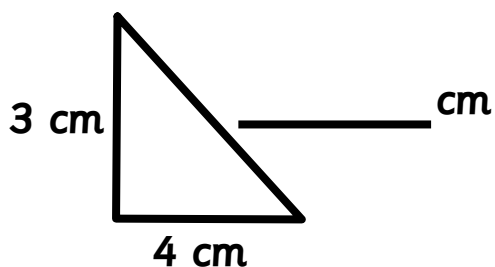


perimeter = \_\_\_\_\_



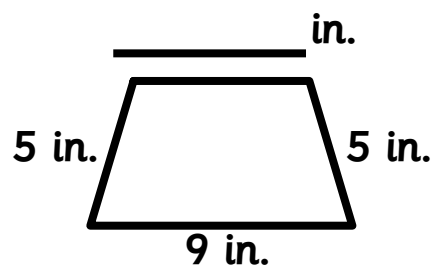
Find the length of the missing side in each shape.

7



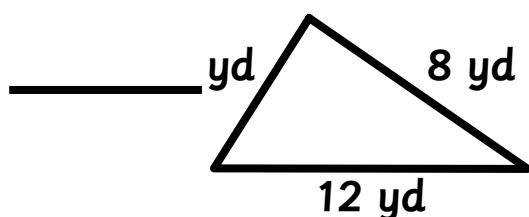
perimeter = 12 cm

8



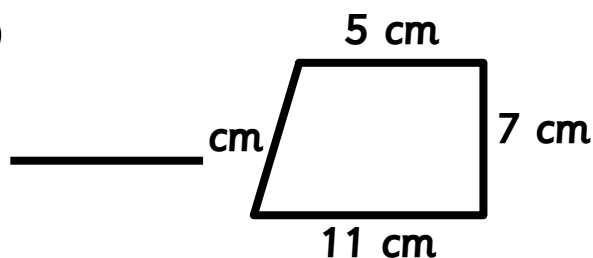
perimeter = 23 in.

9



perimeter = 26 yd

10



perimeter = 31 cm